



Answer all TWENTY SIX questions.

Write your answers in the spaces provided.

You must write down all the stages in your working.

- 1 Write 75 millimetres as a fraction of 3 metres.  
Give your answer in its simplest form.

.....  
(Total for Question 1 is 2 marks)

- 2 (a) Write 5.142557 to 3 decimal places.

.....  
(1)

- (b) Write 6281 to 3 significant figures.

.....  
(1)

(Total for Question 2 is 2 marks)

- 3 Simplify  $\frac{8t^7v^3}{2t^2v}$

.....  
(Total for Question 3 is 2 marks)

DO NOT WRITE IN THIS AREA

DO NOT WRITE IN THIS AREA

DO NOT WRITE IN THIS AREA



DO NOT WRITE IN THIS AREA

DO NOT WRITE IN THIS AREA

DO NOT WRITE IN THIS AREA

4 The  $n$ th term of a sequence is given by  $7n^2 + 100$

(a) Find the 5th term of the sequence.

.....  
(1)

Barney says that 37 is a term in the sequence.  
Barney is wrong.

(b) Explain why Barney is wrong.

.....  
.....  
(1)

**(Total for Question 4 is 2 marks)**

5 Evaluate  $\frac{6 \times 10^9 + 1.8 \times 10^8}{3 \times 10^2}$

Give your answer in standard form.

.....  
(Total for Question 5 is 2 marks)



P 7 3 4 9 5 A 0 3 2 4

6 Simplify  $(36a^8c^2)^{\frac{3}{2}}$

.....  
(Total for Question 6 is 2 marks)

7 Without using a calculator and showing all your working, calculate

$$2\frac{1}{4} \div 2\frac{1}{7}$$

Give your answer as a mixed number in its simplest form.

.....  
(Total for Question 7 is 3 marks)

DO NOT WRITE IN THIS AREA

DO NOT WRITE IN THIS AREA

DO NOT WRITE IN THIS AREA



DO NOT WRITE IN THIS AREA

DO NOT WRITE IN THIS AREA

DO NOT WRITE IN THIS AREA

8 Given that  $y = 12x^3 + \frac{16}{x^2}$   
find  $\frac{dy}{dx}$

$$\frac{dy}{dx} = \dots\dots\dots$$

(Total for Question 8 is 3 marks)

9  $X = \frac{a}{c-f}$

$a = 40$  to the nearest whole number

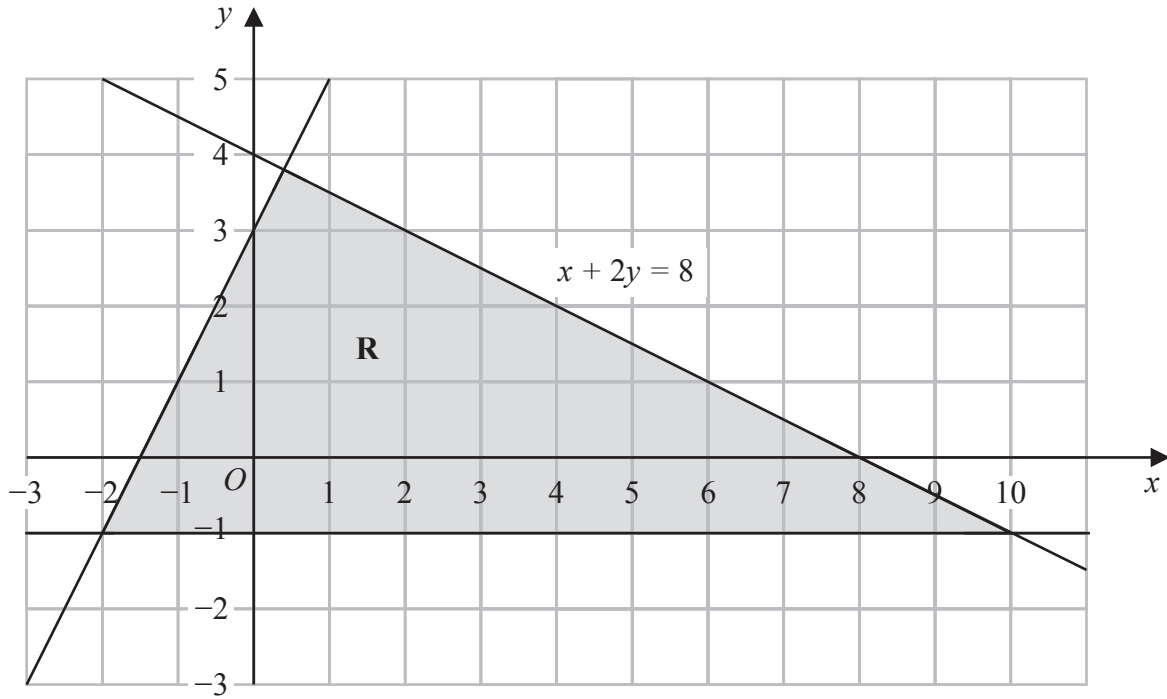
$c = 2.2$  to 1 decimal place

$f = 0.6$  to 1 decimal place

Calculate the upper bound for the value of  $X$   
Show your working clearly.

.....  
(Total for Question 9 is 3 marks)





The region **R**, shown shaded in the diagram, is bounded by three straight lines.

Find three inequalities that define **R**

.....

.....

.....

(Total for Question 10 is 4 marks)

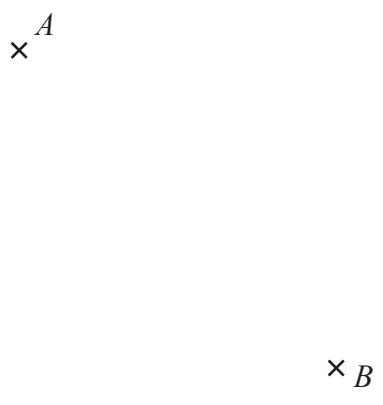


DO NOT WRITE IN THIS AREA

DO NOT WRITE IN THIS AREA

DO NOT WRITE IN THIS AREA

11 The diagram shows the point  $A$  and the point  $B$



(a) Construct the locus of all points that are 4 cm from  $A$  (1)

(b) Using ruler and compasses, and **showing all your construction lines**, construct the perpendicular bisector of  $AB$  (2)

The region  $R$  consists of all the points that are nearer to  $B$  than to  $A$  and that are less than 4 cm from  $A$

(c) Show, by shading, the region  $R$   
Label the region  $R$  (1)

(Total for Question 11 is 4 marks)



12

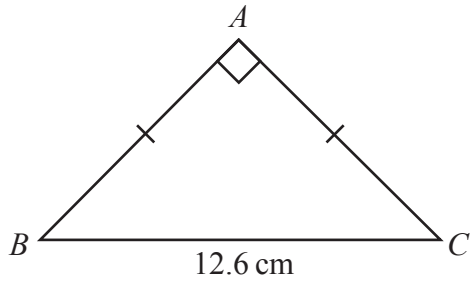


Diagram **NOT**  
accurately drawn

The diagram shows isosceles triangle  $ABC$  where  $AB = AC$

$$\angle BAC = 90^\circ \quad BC = 12.6 \text{ cm}$$

Calculate the perimeter, in cm to one decimal place, of the triangle.

..... cm

(Total for Question 12 is 4 marks)

DO NOT WRITE IN THIS AREA

DO NOT WRITE IN THIS AREA

DO NOT WRITE IN THIS AREA





13

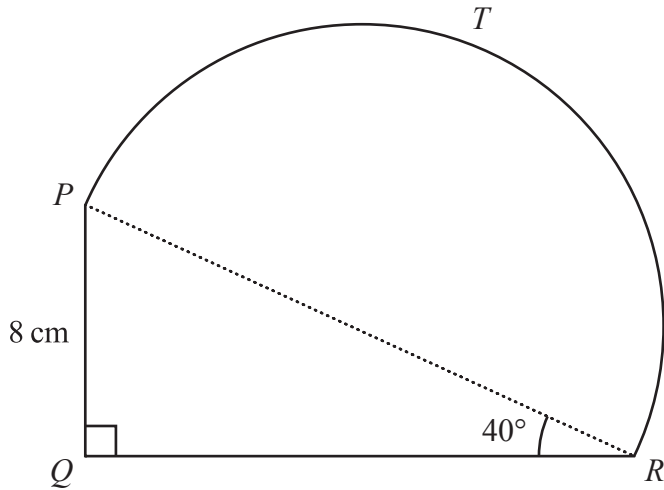


Diagram NOT accurately drawn

The diagram shows shape  $PTRQ$  where  $PQR$  is a triangle and  $PTR$  is a semicircle with diameter  $PR$

$$\angle PQR = 90^\circ \quad \angle PRQ = 40^\circ \quad PQ = 8 \text{ cm}$$

Calculate the total area, in  $\text{cm}^2$  to the nearest whole number, of shape  $PTRQ$

.....  $\text{cm}^2$

(Total for Question 13 is 4 marks)

DO NOT WRITE IN THIS AREA



14 Solve the simultaneous equations

$$2x + 6y = 14$$

$$3x + 5y = 10$$

Show clear algebraic working.

$$x = \dots\dots\dots$$

$$y = \dots\dots\dots$$

(Total for Question 14 is 4 marks)

15 Make  $y$  the subject of  $c = \sqrt{\frac{3y + 5}{8 - y}}$

.....

(Total for Question 15 is 4 marks)



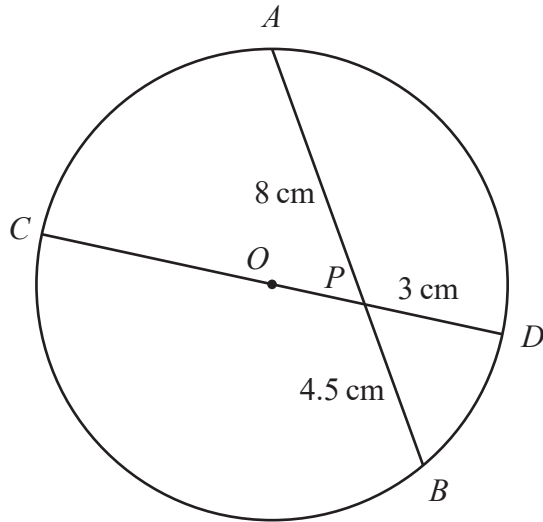


Diagram NOT accurately drawn

$A, D, B$  and  $C$  are points on a circle centre  $O$

$COD$  is a diameter of the circle.

$AB$  is a chord of the circle.

$COD$  and  $AB$  intersect at the point  $P$

$AP = 8 \text{ cm}$        $PB = 4.5 \text{ cm}$        $PD = 3 \text{ cm}$

Calculate the circumference, in cm to 3 significant figures, of the circle.

..... cm

(Total for Question 16 is 4 marks)

DO NOT WRITE IN THIS AREA



$$17 \quad \vec{OA} = \begin{pmatrix} 3 \\ -2 \end{pmatrix} \quad \vec{BA} = \begin{pmatrix} 5 \\ -9 \end{pmatrix}$$

(a) Find the position vector of the point  $B$

$$\begin{pmatrix} \phantom{0} \\ \phantom{0} \end{pmatrix} \quad (2)$$

(b) Calculate  $|\vec{OB}|$ , giving your answer as a surd.

$$|\vec{OB}| = \dots\dots\dots (2)$$

(Total for Question 17 is 4 marks)



DO NOT WRITE IN THIS AREA

DO NOT WRITE IN THIS AREA

DO NOT WRITE IN THIS AREA

18 The table gives information about the heights, in cm, of 80 plants in a garden.

Height ( $h$ cm)	Frequency
$0 < h \leq 10$	2
$10 < h \leq 20$	26
$20 < h \leq 30$	10
$30 < h \leq 40$	24
$40 < h \leq 50$	18

(a) Find the class interval that contains the median height of these plants.

.....  
(1)

(b) Calculate an estimate for the mean height, in cm, of these plants.

..... cm  
(4)

(Total for Question 18 is 5 marks)

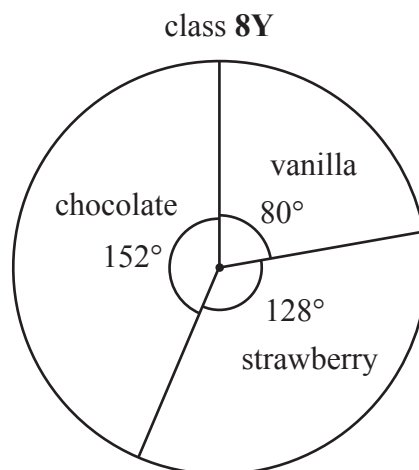


- 19 The students in class 7T and the students in class 8Y were asked to name their favourite ice cream flavour.

The table shows information about the favourite ice cream flavour for class 7T

The pie chart shows information about the favourite ice cream flavour for class 8Y

ice cream flavour	number of students
vanilla	$3x + 1$
strawberry	$5x - 12$
chocolate	$2x + 3$



There are 32 students in class 7T

There are 45 students in class 8Y

More students in class 7T than in class 8Y said vanilla was their favourite ice cream flavour.

Find how many more.

(Total for Question 19 is 5 marks)



DO NOT WRITE IN THIS AREA

DO NOT WRITE IN THIS AREA

DO NOT WRITE IN THIS AREA

20 (a) Solve  $\frac{7+3y}{2} + 5 = 4y - 7$

Show clear algebraic working.

$y = \dots\dots\dots$   
(3)

$A = 8x - 2w$

(b) Work out the value of  $x$  when  $A = -35$  and  $w = -4.5$

$x = \dots\dots\dots$   
(2)

(Total for Question 20 is 5 marks)



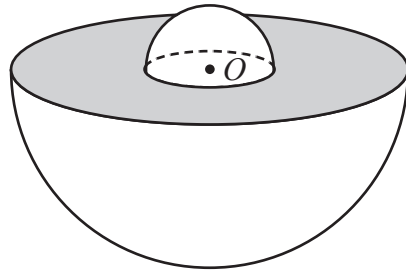


Diagram **NOT**  
accurately drawn

The diagram shows a solid shape made by joining a large hemisphere and a small hemisphere.

The centre of the base of the large hemisphere and the centre of the base of the small hemisphere meet at the point  $O$

$$\text{radius of large hemisphere} : \text{radius of small hemisphere} = 3 : 1$$

The total surface area of the solid shape is  $567\pi \text{ cm}^2$

Calculate the total volume, in  $\text{cm}^3$  to 3 significant figures, of the solid shape.





DO NOT WRITE IN THIS AREA

DO NOT WRITE IN THIS AREA

DO NOT WRITE IN THIS AREA

..... cm<sup>3</sup>

**(Total for Question 21 is 5 marks)**

**Turn over for Question 22**



22 (a) Express  $\sqrt{50} + \sqrt{242}$  in the form  $a\sqrt{a}$  where  $a$  is an integer.

.....  
(2)

(b) Express  $\frac{12}{\sqrt{5}-1}$  in the form  $y\sqrt{x} + y$  where  $x$  and  $y$  are integers.  
Show each stage of your working.

.....  
(3)

(Total for Question 22 is 5 marks)



DO NOT WRITE IN THIS AREA

DO NOT WRITE IN THIS AREA

DO NOT WRITE IN THIS AREA

23  $(x+4)$  is a factor of  $6x^3 + kx^2 - 26x - 24$ , where  $k$  is a constant.

(a) Use the factor theorem to show that  $k = 19$

(2)

(b) Hence solve  $6x^3 + 19x^2 - 26x - 24 = 0$   
Show clear algebraic working.

(4)

(Total for Question 23 is 6 marks)



P 7 3 4 9 5 A 0 1 9 2 4

24 There are only pink and yellow sweets in a bag containing  $N$  sweets.

There are 25 more pink sweets than yellow sweets.

Stan takes at random 2 sweets from the bag.

The probability that Stan takes 2 pink sweets from the bag is  $\frac{7}{19}$

Find the probability that Stan takes 2 yellow sweets from the bag.  
Show clear algebraic working.



DO NOT WRITE IN THIS AREA

DO NOT WRITE IN THIS AREA

DO NOT WRITE IN THIS AREA

.....  
**(Total for Question 24 is 6 marks)**

**Turn over for Question 25**



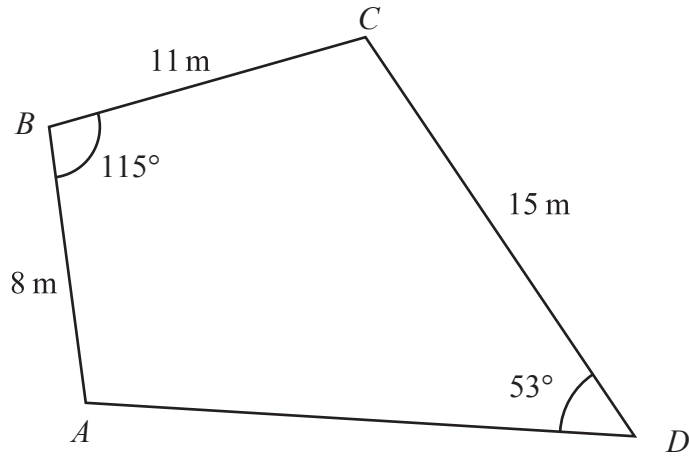


Diagram **NOT**  
accurately drawn

The diagram represents a small horizontal field  $ABCD$

$$AB = 8 \text{ m} \quad BC = 11 \text{ m} \quad CD = 15 \text{ m}$$

$$\angle ABC = 115^\circ \quad \angle ADC = 53^\circ$$

Calculate, in  $\text{m}^2$  to the nearest whole number, the area of the field.



DO NOT WRITE IN THIS AREA

DO NOT WRITE IN THIS AREA

DO NOT WRITE IN THIS AREA

..... m<sup>2</sup>

**(Total for Question 25 is 5 marks)**

**Turn over for Question 26**



26 Show that  $\left(\frac{6}{x-2} + \frac{4}{x+3}\right) \times \frac{5x^2 - 15x + 10}{x^2 - 1}$  can be written

in the form  $\frac{p}{x+q}$  where  $p$  and  $q$  are integers to be found.

(Total for Question 26 is 5 marks)

TOTAL FOR PAPER IS 100 MARKS

DO NOT WRITE IN THIS AREA

DO NOT WRITE IN THIS AREA

DO NOT WRITE IN THIS AREA

